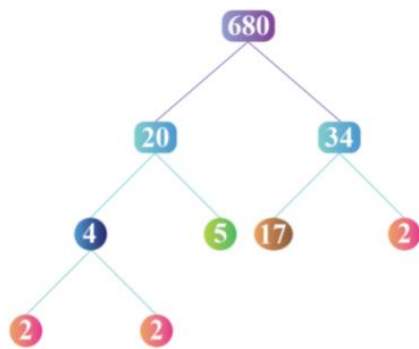


OC Placement Test SAMPLE MATHS Questions



Out of the certain number of pens in the box,  $\frac{1}{5}$ <sup>th</sup> was used in stationeries and  $\frac{1}{6}$ <sup>th</sup> was used in offices. If there are 240 pens in the box, how many are used?

- a. 80 pens.
- b. 84 pens.
- c. 88 pens.
- d. 86 pens.
- e. 90 pens.

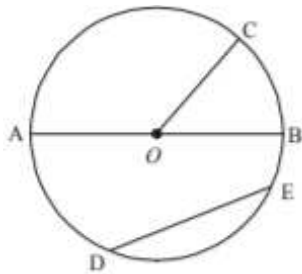


How many prime factors does 680 have considering the above figure?

- a. 4.
- b. 5.
- c. 3.
- d. 2.
- e. 1.

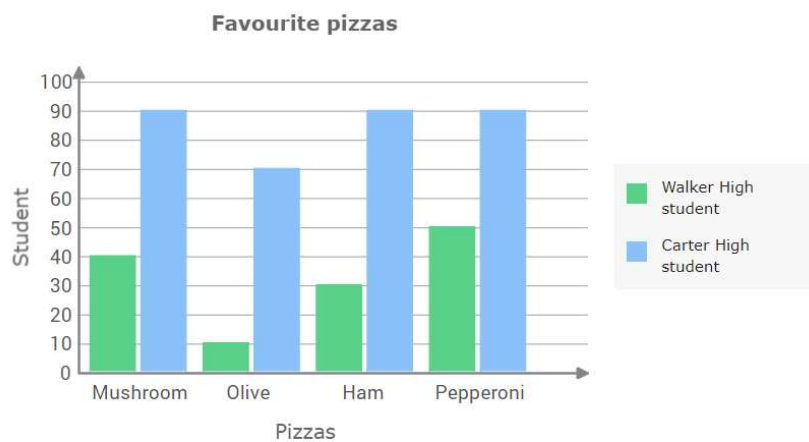
A team of 24 customer service representatives work at a customer service hotline which operates 24 hours a day. There are four shifts. On an average, 630 calls are received during the 3 normal shifts and 115 calls are received during the midnight shift. Last Friday, a total of 764 calls were received during all four shifts. How many more calls were received compared to the average number of calls?

- a. 18.
- b. 17.
- c. 15.
- d. 19.
- e. 21.



How many lines can be called as the radius of the above circle?

- a. 2.
- b. 3.
- c. 1.
- d. 4.
- e. 5.



Study the above graph and answer the following question.

How many more students of Walker High prefer pepperoni pizza than that of Carter High?

- a. 40.
- b. 50.
- c. 30.
- d. 20.
- e. 60.