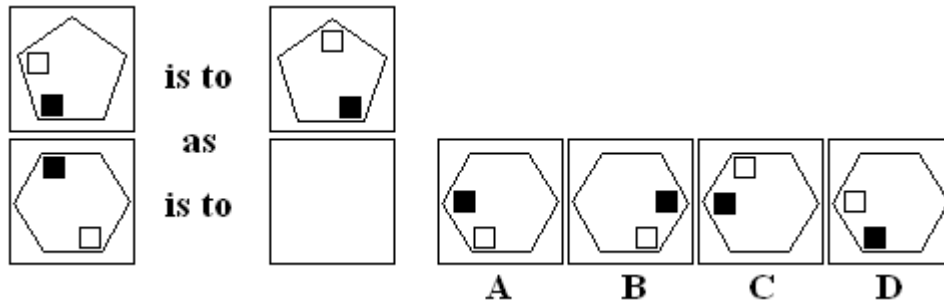


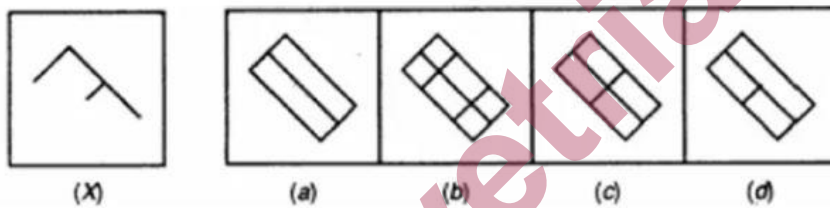
HAST Sample Abstract Reasoning Year 7

1. Find the next figure in the given sequence.



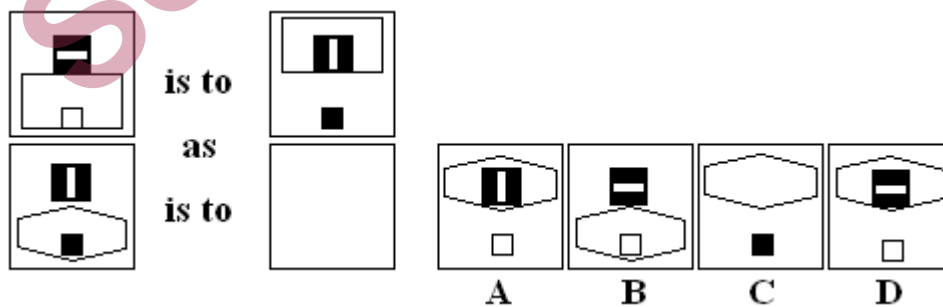
- a. B
- b. C
- c. A
- d. D

2. From the given answer figures, select the one in which the question figure is hidden/embedded



- a. A
- b. B
- c. D
- d. C

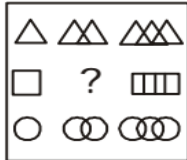
3. Which figure completes the series?



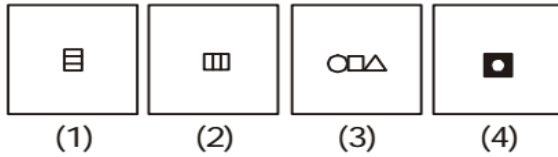
- a. A
- b. D
- c. B
- d. C

4. Which of the answer figures complete the following series?

Questions Figure :

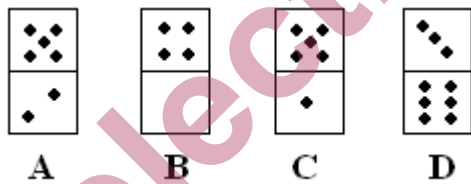
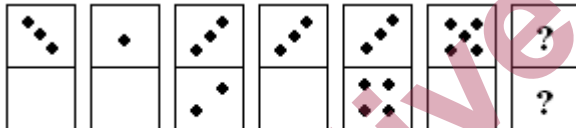


Answer Figures :



- a. 1
- b. 4
- c. 3
- d. 2

5. Which figure completes the series?



- a. A
- b. C
- c. B
- d. D

Selectivetrials.com.au