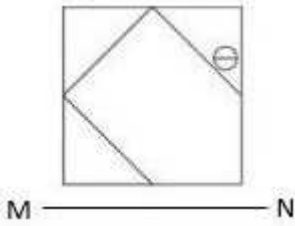


HAST Sample Abstract Reasoning Year 8 and 9

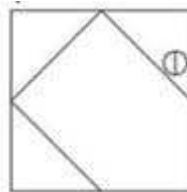
1. If a mirror is placed on the line MN, then which of the answer figures is the right image of the given figure?



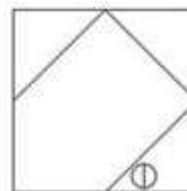
a.



b.



c.



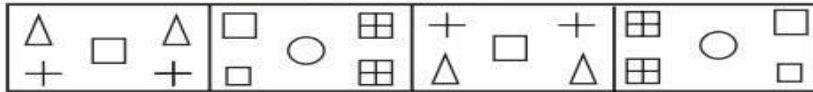
d.



Selectivetrials.com.au

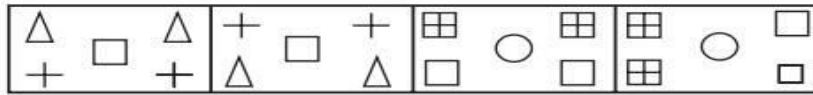
2. Which of the answer figures complete the following pattern?

Question Figure



(a) (b) (c) (d)

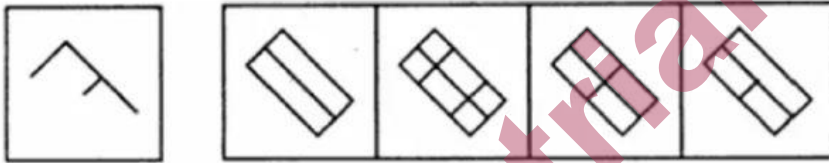
Answer Figure



1 2 3 4

- a. 1
- b. 4
- c. 2
- d. 3

3. From the given answer figures, select the one in which the question figure is hidden/embedded



(X) (a) (b) (c) (d)

- a. A
- b. B
- c. D
- d. C

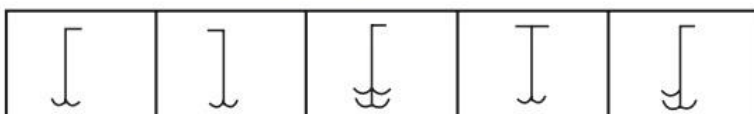
4. Which of the following completes the series?

Question Figure



(a) (b) (c) (d)

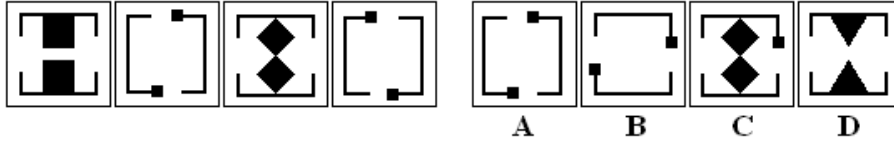
Answer Figure



1 2 3 4 5

- a. 1
- b. 2
- c. 4
- d. 3

5. Which figure completes the series?



- a. A
- b. D
- c. B
- d. C

Selectivetrial.com.au